


Name: _____

Class: _____ Date: _____

Solve these questions.

1

	6	7	3	8													




2

	8	5	9	3													




3

What is $\frac{3}{7}$ of 84?



4

		3	2	7													
	x			5													




5

		6	7	8													
	x			7													



6

What is $8 \times \frac{2}{3}$ as a mixed number?




7

		4	3	9	5												
	-	2	7	4	8												




8

		6	3	0	4												
	-	1	5	7	2												



9

			5	2	7												
			3	4	1												
		+	6	0	6												



10

			3	5	2												
		4	9	0	3												
		5	2	7	1												
	+		4	4	2												



For teacher use

Your mark	_____ out of 10
What went well	
How to improve	