

17.01.2020


L.O. To know 1 more and 1 less

Please count the objects in each box and then record what is one less and one more than this initial number.

Write the 3 numbers in your book.

One less..


Total number of objects..



One more..

One less..


Total number of objects..



One more..

One less..


Total number of objects..



One more..

One less..


Total number of objects..



One more..

One less..

Total number of objects..



One more..