

Maths Homework - red and orange groups

13/1/20

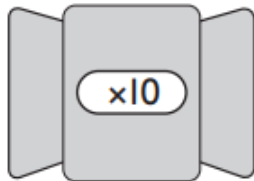
Use place value to work out the change
in the hedgehog's weight.

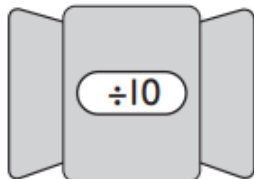
Four hedgehogs are shown on kitchen scales. Each scale has a digital display and a yellow button indicating a weight change.

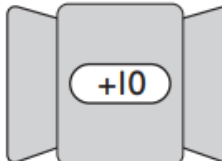
- Top-left: Hedgehog on a scale showing 280 g. Below it is a yellow button with $+ 300 \text{ g}$.
- Top-right: Hedgehog on a scale showing 670 g. Below it is a yellow button with $- 200 \text{ g}$.
- Bottom-left: Hedgehog on a scale showing 515 g. Below it is a yellow button with $+ 60 \text{ g}$.
- Bottom-right: Hedgehog on a scale showing 495 g. Below it is a yellow button with $- 80 \text{ g}$.

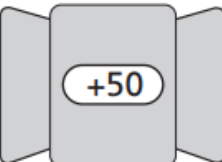
Ins and outs

Work out which numbers go **in**
and come **out** of these function
machines.

5 
36 $\times 10$
 670

40 
230 $\div 10$
 18

243 
 $+ 10$ 874
395

25 
340 $+ 50$
480