

Year 3 Maths Homework - Orange and red groups 11/11/19

Money

**Counting coins**

Write the amount in each purse.



1



2




3

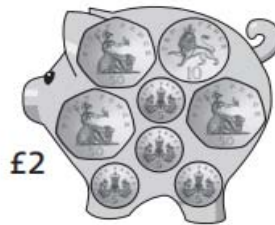


4

Write the coin that is missing from each box.



5

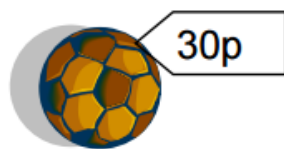


6

**You have £2**

How many different things can you buy with your money?

Make 5 different lists - write down what you have bought and the total cost of each list.



30p



20p



80p



50p



55p

spr1wk2les3b

E.g. List 1 A pencil case, 2 footballs and a teddy bear

$$50p + 60p + 80p = 190p = \text{£}1.90$$