

Finding totals

Write in the total of each number strip.

The first one has been done for you.

75	
45	30

1

54	20

2

48	31

3

63	20

4







42	30

5

37	21

How much is left?

Each child spends 21p. Write the money they have left.

					
55p	38p	29p	46p	72p	61p
6 <input type="text"/>	7 <input type="text"/>	8 <input type="text"/>	9 <input type="text"/>	10 <input type="text"/>	11 <input type="text"/>

Coconut game challenge!

12 The game costs 11p for one turn.
Sam has 99p. How many turns can she have?

13 The price of a turn is raised to 12p.
How many turns can Sam have now?

 Write the missing number.

14 $36 + \square = 76$

15 $54 - \square = 24$

I found this:

Easy
 Challenging
 I needed help