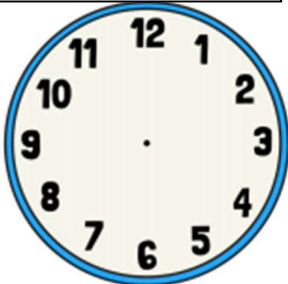


Year 3 Maths Homework 30.9.19


Blue, green, orange and red groups

Draw the hands on clocks below for the analogue time shown and write the digital time underneath.

Half past 2




Quarter past 10



Quarter to 7




Half past 4




Draw the hands on the clocks below for the digital times shown and write the analogue time, in words, below.


8:30



1:45



11:15



2:15

