

Year 3 Maths Homework 30.9.19


Yellow and purple groups

Draw the hands on clocks below for the
analogue time shown and write the
digital time underneath.

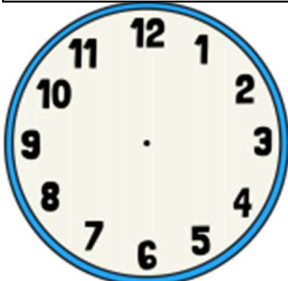
Quarter to 2




Quarter past 10



Twenty past 7

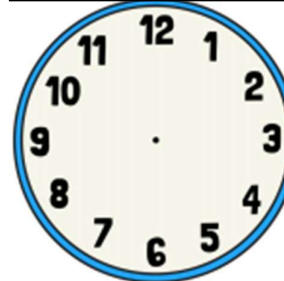


Ten to 4




Draw the hands on the clocks below for the
digital times shown and write the
analogue time, in words, below.


8:15



1:45



11:25



2:50

