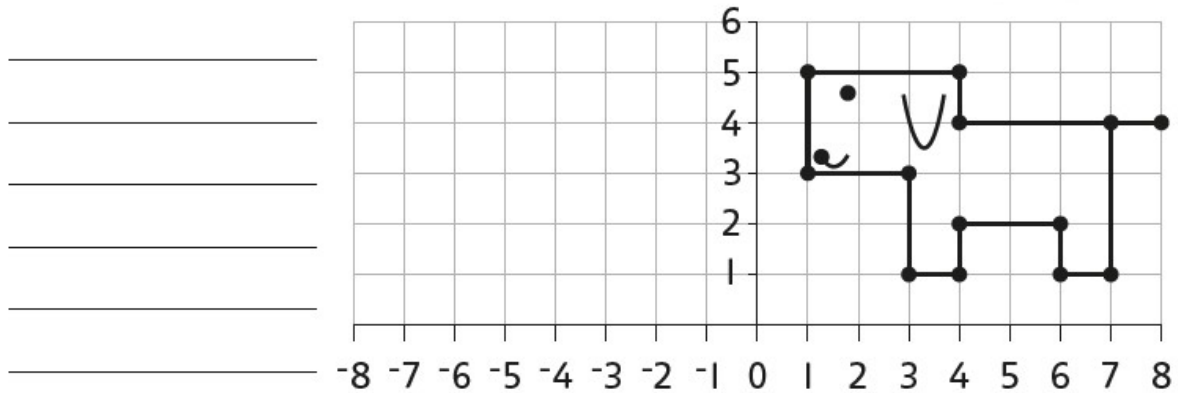


Coordinate canine

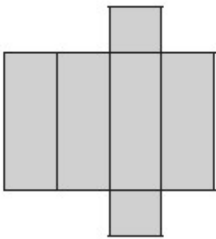
What do you notice about how the coordinates have changed?



- 1 Reflect this picture of a dog in the y-axis.
- 2 Write the new coordinates of each point.



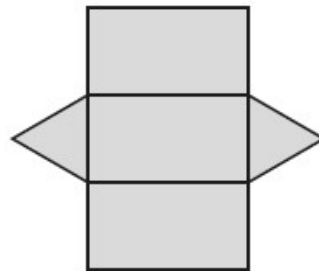
This net will make a _____.



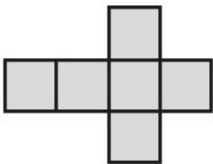
Choose a 3D shape name that matches the nets below. BE CAREFUL there is a trick one that doesn't match any of the nets!

Triangular prism Cuboid
Cube Square based pyramid
Cylinder Triangular based pyramid

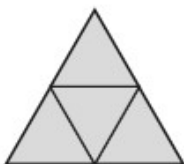
This net will make a _____.



This net will make a _____.



This net will make a _____.



This net will make a _____.

