

Easy but speedy

Write each group of numbers in order, smallest first.

1 234, 432, 324

____, ____, ____

2 423, 478, 456

____, ____, ____

3 756, 765, 705

____, ____, ____

4 Write four numbers which are between 550 and 650.

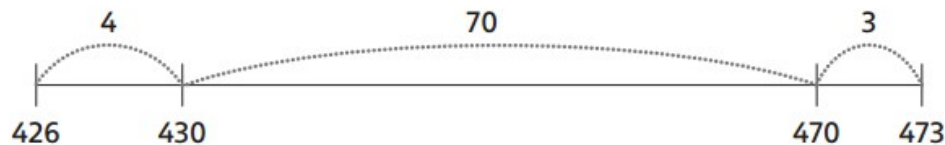
550 _____ 650

Frog's bad day

Frog has had a bad Day. He has been getting answers wrong. Tick where he got an answer right. Circle where he made a mistake, so he can see where he went wrong.

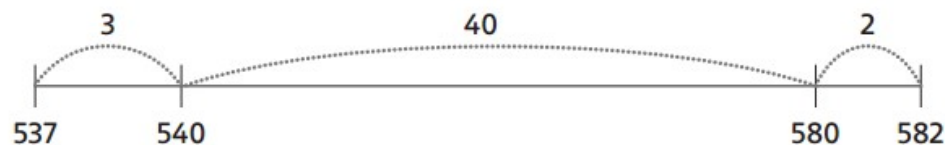
5 $473 - 426 = 77$

$70 + 4 + 3 = 77$



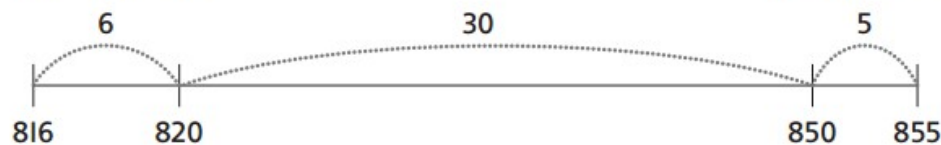
6 $582 - 537 = 45$

$40 + 3 + 2 = 45$



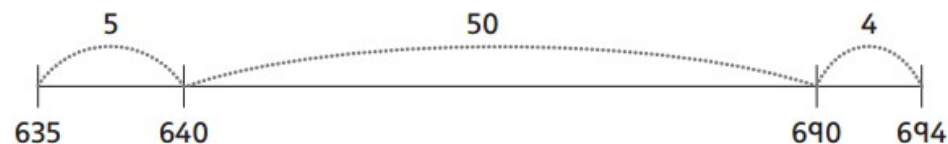
7 $855 - 816 = 41$

$30 + 6 + 5 = 41$



8 $694 - 635 = 58$

$50 + 5 + 4 = 58$



Now use frog jumps to answer these subtractions by counting up -
don't forget to start with the SMALLEST number:

9. $175 - 158 =$

10. $193 - 139 =$

11. $252 - 216 =$

12. $681 - 616 =$