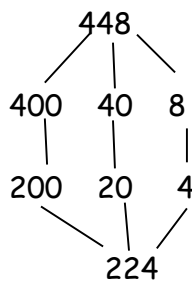


Year 3 Maths Homework - Purple and yellow groups  
25/3/19

Find halfway between these numbers (remember to add them up and then halve your answer) I've done one for you to remind you!

1 - 130, 318

$130 + 318 = 448$  (I used place value addition)



2 - 204, 422

3 - 612, 206

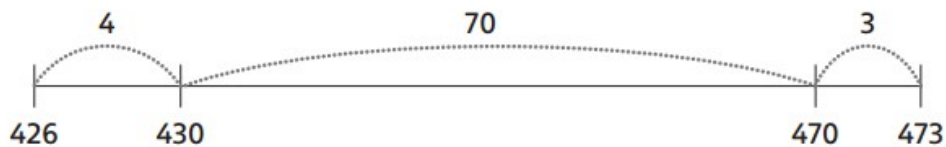
4 - 444, 216

### Frog's bad day

Frog has had a bad Day. He has been getting answers wrong. Tick where he got an answer right. Circle where he made a mistake, so he can see where he went wrong.


5  $473 - 426 = 77$

$70 + 4 + 3 = 77$



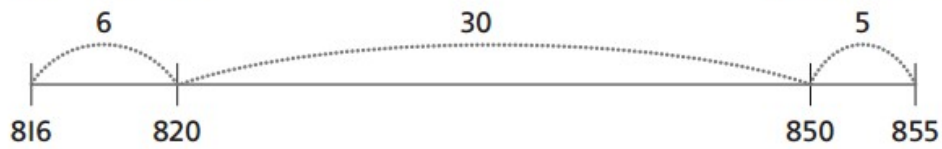
6  $582 - 537 = 45$

$40 + 3 + 2 = 45$



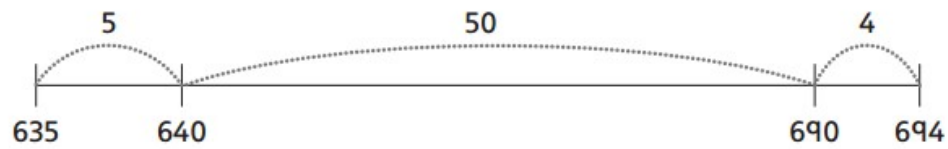
7  $855 - 816 = 41$

$30 + 6 + 5 = 41$



8  $694 - 635 = 58$

$50 + 5 + 4 = 58$



## Frog's big jump



- 9 Frog is feeling better! Draw a jotting to help him work out the difference between the smallest number on the cards and the biggest number. It is quite a jump!