

Blue group - work out the perimeter of the first 3 shapes.

Red and green groups - work out the perimeter of the first 6 shapes.

Purple and yellow groups - work out the perimeter of the last 6 shapes, you'll need to use a ruler for the last 3.



Perimeter = _____




Perimeter = _____



Perimeter = _____


The side length of each square is 1ft. Calculate the perimeter of each shape.

1)



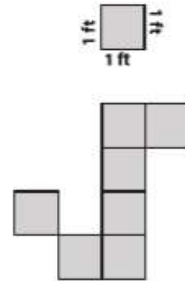
Perimeter = ft

2)



Perimeter = ft

3)



Perimeter = ft

