







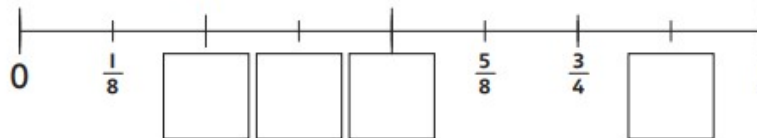
Year 3
Maths Homework - blue group
21/1/19

Find the fractions

Each pair of jigsaw pieces has a total of one whole. Write the missing fractions on the blank jigsaw pieces.

<p>1 </p> <p>2 </p> <p>3 </p>	<p>4 </p> <p>5 </p> <p>6 </p>
----------------------------------------------------------------------------------------------------------------------------------------------------------------------------------------------------------------------------------------------------------------------------------	-------------------------------------------------------------------------------------------------------------------------------------------------------------------------------------------------------------------------------------------------------------------------------------

7 Write the missing fractions on this line.



Ask someone to time you
How many of these can you do in 5 minutes?

$2 \times 3 =$	$3 \times 7 =$	$15 \div 3 =$	$9 \div 3 =$
$3 \times 6 =$	$10 \times 3 =$	$6 \div 3 =$	$21 \div 3 =$
$6 \times 3 =$	$3 \times 0 =$	$24 \div 3 =$	$27 \div 3 =$
$3 \times 5 =$	$0 \times 3 =$	$30 \div 3 =$	$6 \div 3 =$
$11 \times 3 =$	$3 \times 2 =$	$18 \div 3 =$	$21 \div 3 =$