







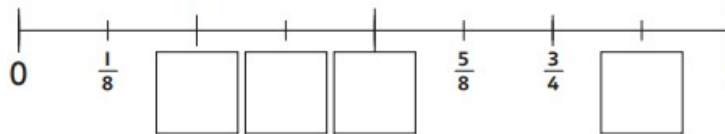
Year 3
Maths Homework - Green and red groups
21/1/19

Find the fractions

Each pair of jigsaw pieces has a total of one whole. Write the missing fractions on the blank jigsaw pieces.

1		4	
2		5	
3		6	

7 Write the missing fractions on this line.



Ask someone to time you
How many of these can you do in 5 minutes?

$2 \times 3 =$	$3 \times 7 =$	$15 \div 3 =$	$9 \div 3 =$
$3 \times 6 =$	$10 \times 3 =$	$6 \div 3 =$	$21 \div 3 =$
$6 \times 3 =$	$3 \times 0 =$	$24 \div 3 =$	$27 \div 3 =$
$3 \times 5 =$	$0 \times 3 =$	$30 \div 3 =$	$6 \div 3 =$
$11 \times 3 =$	$3 \times 2 =$	$18 \div 3 =$	$21 \div 3 =$
$3 \times 3 =$	$7 \times 3 =$	$24 \div 3 =$	$9 \div 3 =$
$12 \times 3 =$	$3 \times 8 =$	$12 \div 3 =$	$27 \div 3 =$
$3 \times 1 =$	$4 \times 3 =$	$21 \div 3 =$	$15 \div 3 =$