

Counting coins

Write the amount in each purse.



1



2

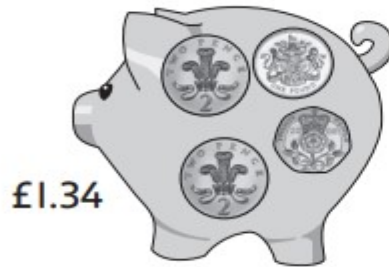


3

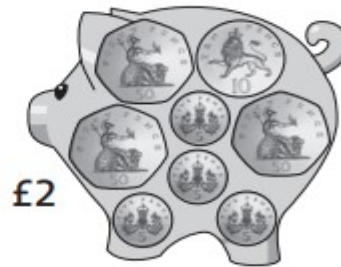


4

Write the coin that is missing from each box.



5




6

You have £10

How many different things can you buy with your money?

Make 5 different lists - write down what you have bought and the total cost of each list.



E.g. List 1 A pencil case, a football and a teddy bear
 $2.50 + 1.50 + 4.95$
 $=£8.95$

Challenge

For each of your lists work out how much change you would get from your £10?