






How much dinner?


Write the fraction of each plate of fish which Fat Cat has eaten.




Find the number of dog biscuits each puppy is given.



$$\frac{1}{4} \text{ of } 44$$



$$\frac{1}{2} \text{ of } 34$$



$$\frac{3}{4} \text{ of } 480$$



$$\frac{2}{5} \text{ of } 300$$