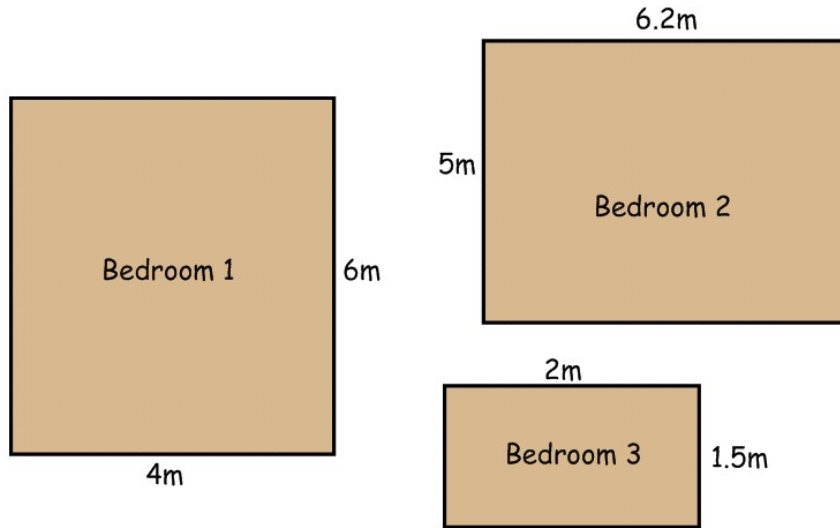
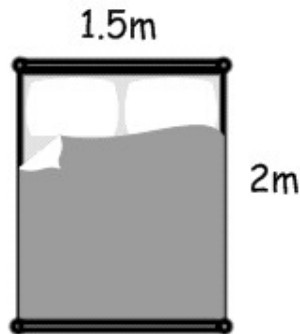


1. Miss Jackson needs to replace all the carpet in each of the three bedrooms. The carpet costs £12 per square metre. How much will each bedroom cost me?



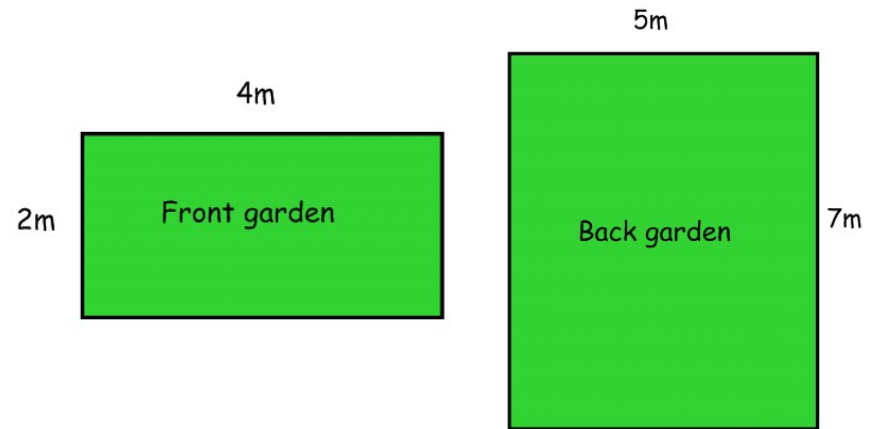
2. Miss Jackson's bed measures 1.5m by 2m. How big does the mattress have to be?



### Maths Homework

LO: To calculate area and perimeter

3. Miss Jackson needs to fence her entire garden. Calculate how many metres of fence she will need for each garden.



4. If each metre of fence costs £2. How much will the total cost be?

5. Miss Jackson decides to pave her front garden with paving slabs. Each slab is a square metre. How many does she need to buy?

6. If each paving slab costs £3.50. How much will it cost to pave the whole front garden?

