

Maths Homework 1.10.18 - Purple and yellow groups


IF THIS IS TOO TRICKY FOR YOU PLEASE TRY THE OTHER SHEET 😊

Draw the hands on clocks below for the
analogue time shown and write the
digital time underneath.


Quarter to 2



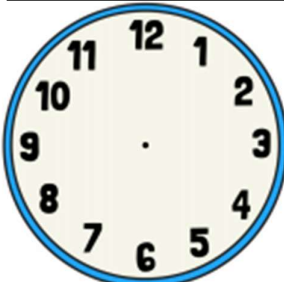
Quarter past 10



Twenty past 7

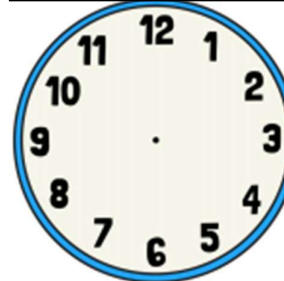


Ten to 4




Draw the hands on the clocks below for the
digital times shown and write the
analogue time, in words, below.

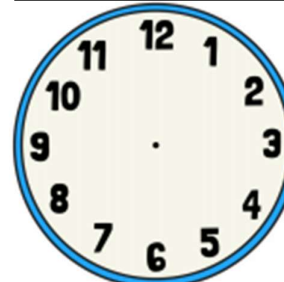
8:15



1:45



11:25



2:50

