

Ordinal numbers


1 Here are some objects



a) Circle the first object.

b) Circle the third object.

2





a) Which flower is coloured?

The flower is coloured.

b) Colour the 5th flower.




3 Here are some shapes.



Complete the sentences.

The 1st shape is a _____.

The 3rd shape is a _____.

The star is the  shape.

4 Draw the shapes in order.

- The last shape is a square.
- The 1st shape is a triangle.
- The 3rd shape is a circle.
- The 2nd shape is a rectangle.

