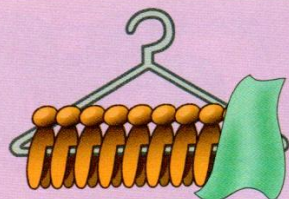
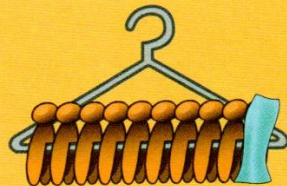


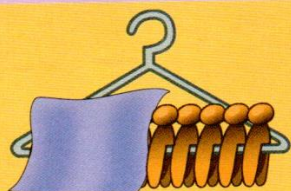
Making 10



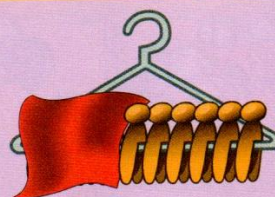
$$8 + \square = 10$$



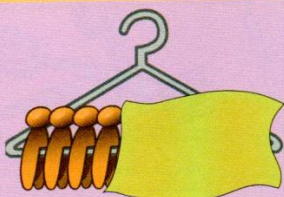
$$9 + \square = 10$$



$$\square + 5 = 10$$



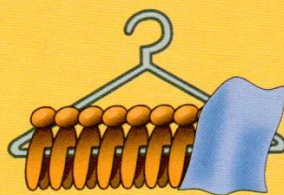
$$\square + 6 = 10$$




$$4 + \square = 10$$



$$3 + \square = 10$$



$$7 + \square = 10$$



Fill in the missing number for each addition.



ACTION Use your fingers to help you.

THINK

Find sets of three playing cards that make 10.