

Compare Durations of Time

1. Circle the odd one out in each row.

A.

35 minutes

from 3 o'clock until half past 3

half an hour

B.

55 minutes

from five past 5 until 6 o'clock

one hour

C.

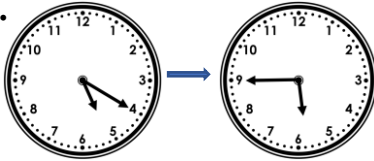
45 minutes

from 5 past 2 until quarter to 3

three quarters of an hour

2. Match each set of clocks with the correct duration.

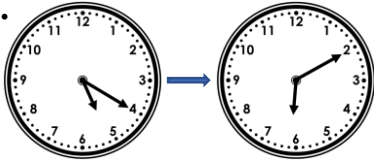
A.



30 minutes

35 minutes


C.



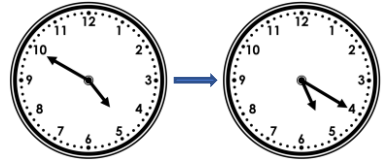
25 minutes

50 minutes

B.



D.



3. The children complete a treasure hunt. The winner finished in 55 minutes. Who won the treasure hunt? Explain how you know.



Leo

I started at ten past 10 and finished at ten past 11.



Katie

I started at 11 o'clock and finished at quarter past 12.



Tilly

I started at half past 9 and finished at 25 minutes to 11.



Tom

I started at quarter to 10 and finished at twenty to 11.